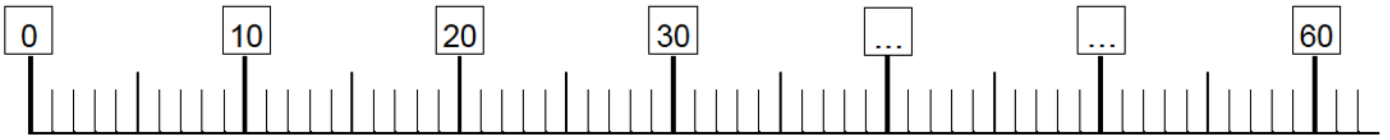


# Mathématiques Semaine du 2 juin

## Autonomie

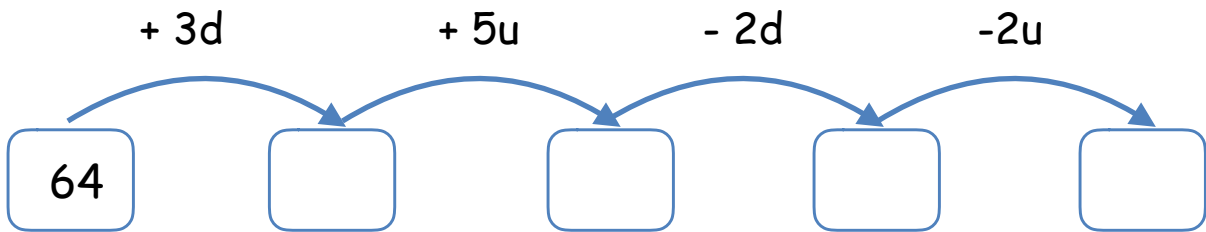
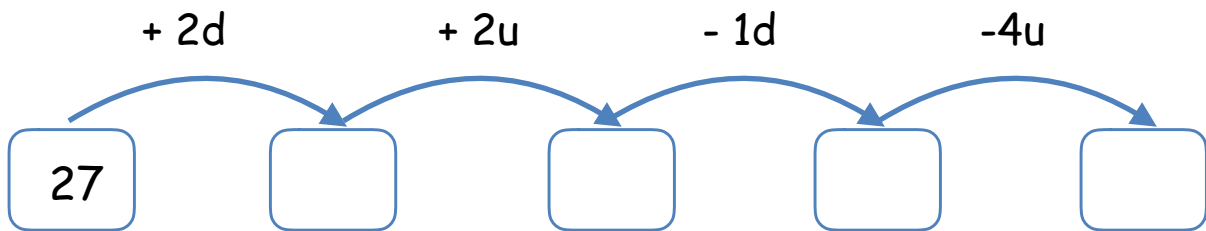
### 1. Droite graduée

Place les nombres suivants sur la droite graduée : 59, 24, 45, 21, 12, 34



Range les du plus petit au plus grand : .....

### 2. Calcule



### 3. Mesure

.....

.....

.....

.....

### Additions à trous

$7 + \dots = 9$

$5 + \dots = 15.$

$7 + \dots = 15$

$6 + \dots = 13.$

$10 + \dots = 16.$

$5 + \dots = 13$

### Tables d'addition

$6 + 7 = .$

$7 + 8 =$

$8 + 9 =$

$6 + 5 =$

$3 + 4 = .$

$2 + 3 = .$

$9 + 7 =$

$9 + 6 =$

### Soustractions

$43 - 2 = .$

$47 - 2 =$

$78 - 1 =$

$96 - 2 =$

$59 - 3 = .$

$87 - 10 = .$

$67 - 20 =$

$75 - 30 =$

### Additions

$56 + 13. = .$

$42 + 27 =$

$38 + 25 = .$

$54 + 39 =$


$27 + 30 =$

$56. + 40 =$

$16 + 20 = .$

$30 + 8 =$

Combien d'étoiles ?



Ecris les nombres en lettres

66 : *soixante-six*

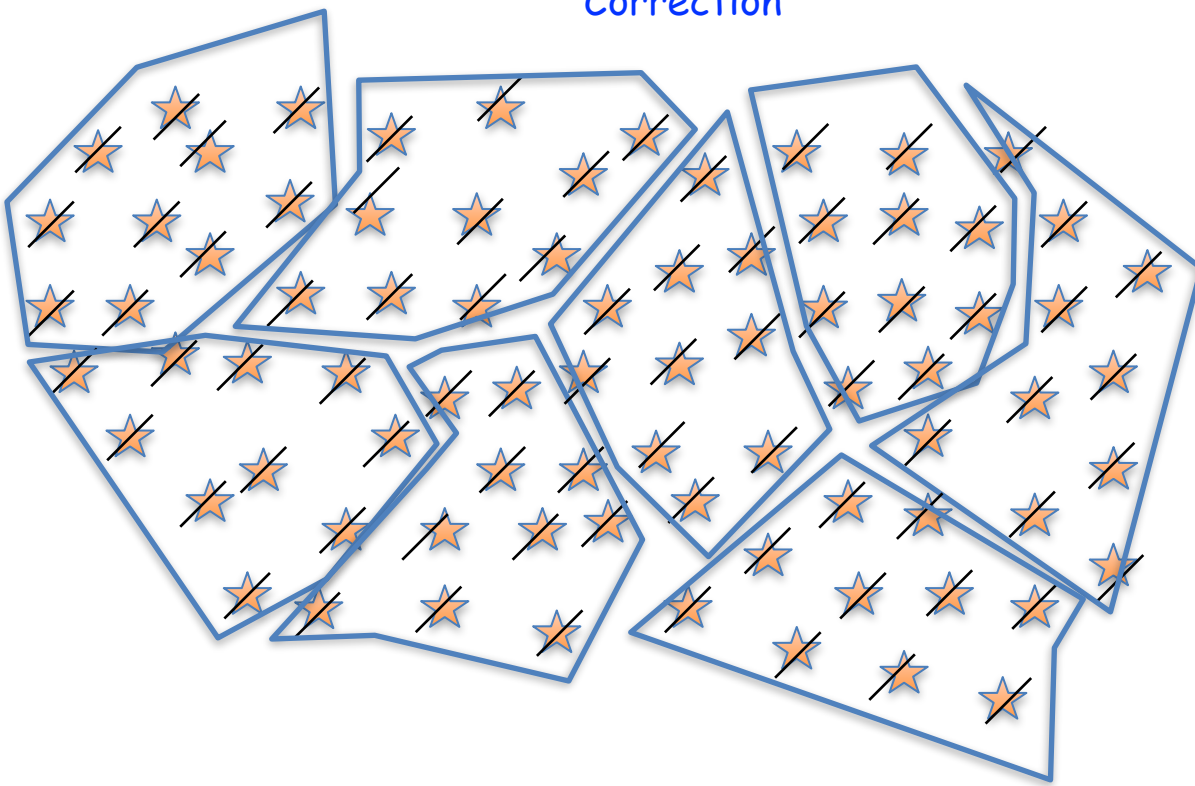
41 : .....

78 : .....

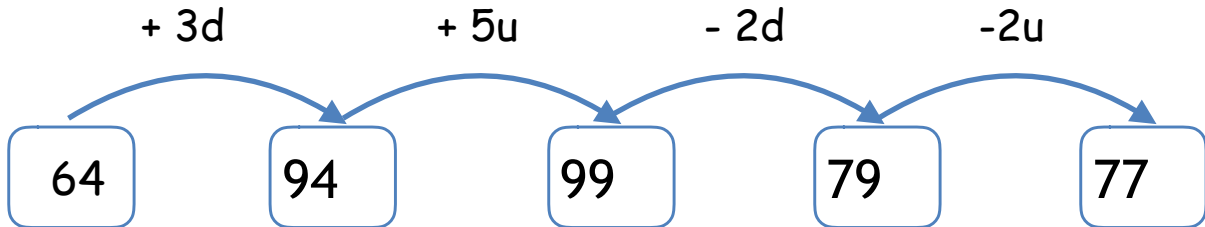
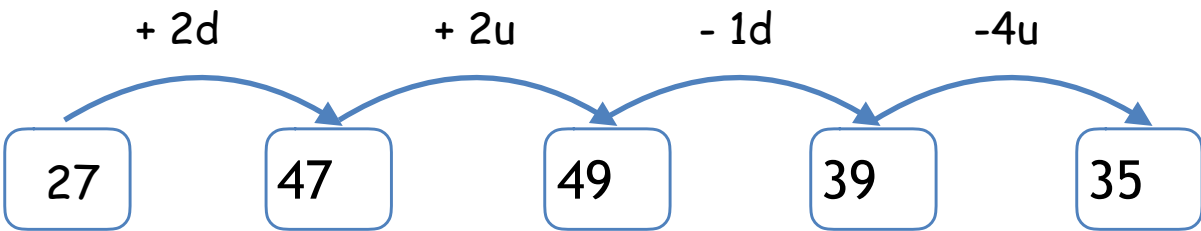
67 : .....

73 : .....

# Correction



80



.....15 cm.....

.....10 cm.....

.....3 CM.....

1 .....

## Correction

### Additions à trous

$7 + 2.. = 9$

$5 + \dots 10 \dots = 15.$

$7 + \dots\dots 8.. = 15$

$6 + \dots 7 \dots = 13.$

$10 + \dots\dots 6 \dots = 16.$

$5 + \dots 8 \dots\dots = 13$

### Tables d'addition

$6 + 7 = . 13$

$7 + 8 = 15$

$8 + 9 = 17$

$6 + 5 = 11$

$3 + 4 = . 7$

$2 + 3 = . 5$

$9 + 7 = 16$

$9 + 6 = 15$

### Soustractions

$43 - 2 = . 41$

$47 - 2 = 45$

$78 - 1 = 77$

$96 - 2 = 94$

$59 - 3 = . 56$

$87 - 10 = . 77$

$67 - 20 = 47$

$75 - 30 = 45$

### Additions

$56 + 13. = . 69$

$42 + 27 = 69$

$38 + 25 = . 63$

$54 + 39 = 93$

$27 + 30 = 57$

$56. + 40 = 96$

$16 + 20 = . 36$

$30 + 8 = 38$